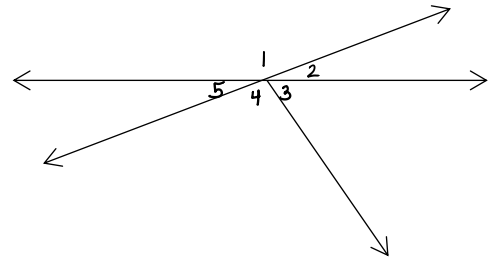


Name: *key*

Section 1.4 Homework

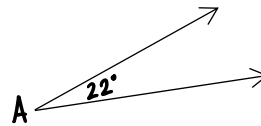
Tell whether the angles are adjacent, linear pair, or none.

- 1. $\angle 1$ and $\angle 2$ Linear pair
- 2. $\angle 2$ and $\angle 3$ adjacent
- 3. $\angle 4$ and $\angle 2$ none
- 4. $\angle 1$ and $\angle 5$ linear pair
- 5. $\angle 1$ and $\angle 4$ none



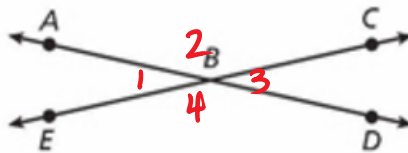
Find the supplement and complement of the angle.

- 6. Supplement of $\angle A$ 158°
- 7. Complement of $\angle A$ 68°



Name all pairs of vertical angles:

- 8. $\angle 1$ and $\angle 3$
 $\angle 2$ and $\angle 4$

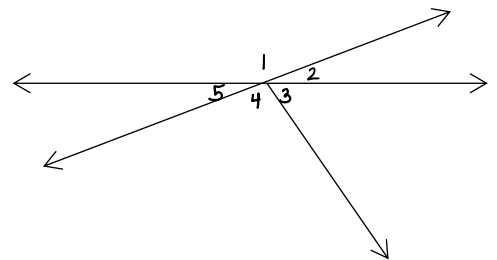


Name:

Section 1.4 Homework

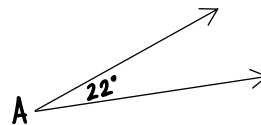
Tell whether the angles are adjacent, linear pair, or none.

- 1. $\angle 1$ and $\angle 2$ _____
- 2. $\angle 2$ and $\angle 3$ _____
- 3. $\angle 4$ and $\angle 2$ _____
- 4. $\angle 1$ and $\angle 5$ _____
- 5. $\angle 1$ and $\angle 4$ _____



Find the supplement and complement of the angle.

- 6. Supplement of $\angle A$ _____
- 7. Complement of $\angle A$ _____



Name all pairs of vertical angles:

- 8. _____

