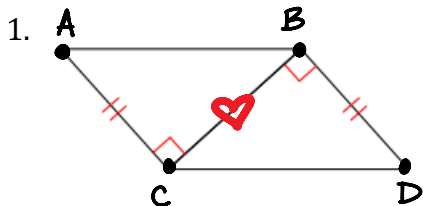


Name: Key

4.5 homework

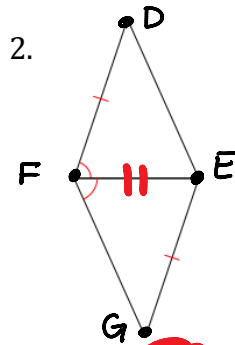
are the triangles congruent? YES or NO? WHY?



Yes or No? **No**

Why? SAS

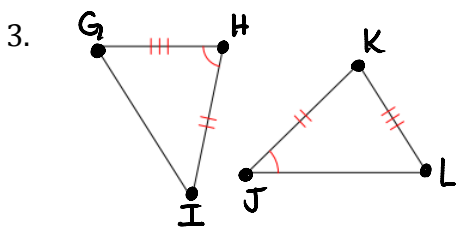
$\triangle ABC \cong \triangle DCB$



Yes or No? **No**

Why? _____

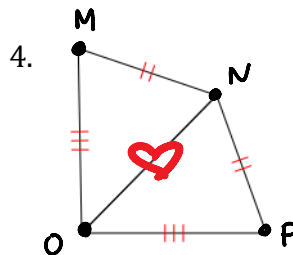
$\triangle DEF \cong \triangle GEF$



Yes or No? **No**

Why? _____

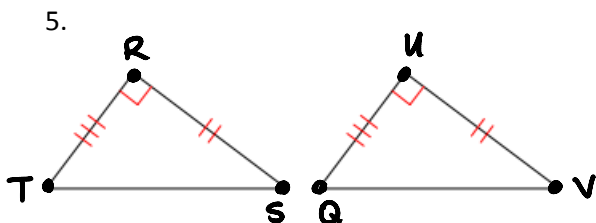
$\triangle GHI \cong \triangle KJL$



Yes or No? **No**

Why? SSS

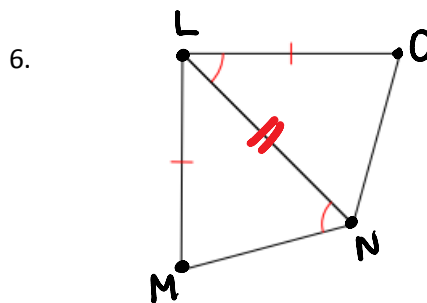
$\triangle MNO \cong \triangle PNO$



Yes or No? **No**

Why? SAS

$\triangle TRS \cong \triangle QUV$



Yes or No? **No**

Why? _____

$\triangle LMN \cong \triangle ONL$