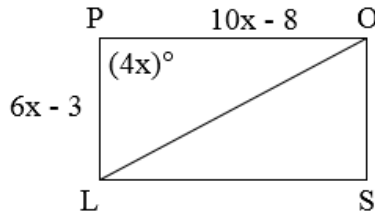


Name: **key**

Chapter 6

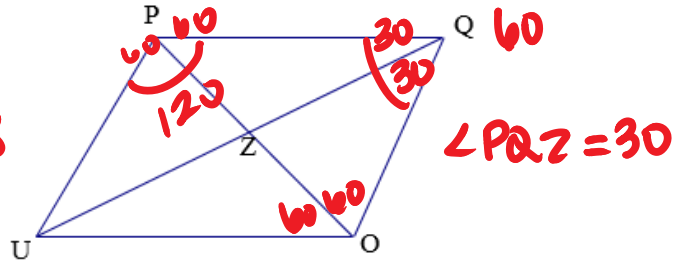
Post-Assessment

1. LSOP is a rectangle. Find LS.



$4x = 90$   
 $x = 22.5$   
 $PO = 10(22.5) - 8$   
 $PO = 217$   
 $LS = 217$

2. PQOU is a rhombus.  $\angle UPQ = 120$ . Find  $\angle PQZ$ .

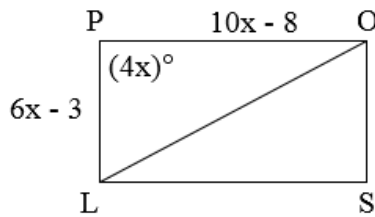


Name:

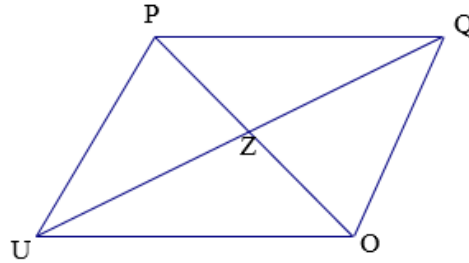
Chapter 6

Post-Assessment

1. LSOP is a rectangle. Find LS.



2. PQOU is a rhombus.  $\angle UPQ = 120$ . Find  $\angle PQZ$ .

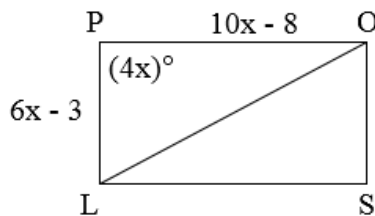


Name:

Chapter 6

Post-Assessment

1. LSOP is a rectangle. Find LS.



2. PQOU is a rhombus.  $\angle UPQ = 120$ . Find  $\angle PQZ$ .

